



The SATs Challenge



The facts...

- Low key - informal classroom setting
- Not strictly timed (range 15 - 40mins)
- MAY - Pupils take Reading, SPAG and Maths challenges.
- JUNE / JULY - Teachers continue to assess pupils in the classroom.
- JULY - Parents will be informed of the results.



The KSI Tests consist of:

ENGLISH

Paper 1: Reading (fiction & non-fiction)

Paper 2: Reading (fiction & non-fiction)

1 x Grammar & Punctuation

1 x Spelling

MATHS

Paper 1: Arithmetic

Paper 2: Reasoning



On Tuesday, Molly was racing in the garden when her mother said, "Molly, tidy up!"

But she was too busy hopping around her race track. Then Molly went for tea, and she still hadn't tidied up.

When she came back, her race track had disappeared. "Something with a lot of arms is tidying up," thought Molly.



3 What was Molly doing on Tuesday?

4 Molly thought that something with many arms had been in the garden.

Why?

Her race track had been...

Tick **one**.

eaten up.

dropped.

picked up.

broken.

English Examples (Reading)

I'm holding on to giant's ears

As we stride along the street

Shouting down at people,

"Hey! Mind my giant's feet!"

We're ducking down through doorways.

We're walking over walls.

I'm safe as houses way up here.

My giant never falls.



10 What is the child holding on to?

1 mark

11 As we stride along the street

Which word means the same as *stride*?

Tick **one**.

crawl

march

dance

climb

1 mark

Sea Spray Swimming Pool

FREE swimming lessons for YOU

Are you aged between 5 and 10? Would you like to learn to swim or to improve your swimming skills? Then you may be interested in our fantastic offer during the school summer holidays.

Sea Spray Swimming Pool is running a super ten-day swimming course and we are making you an offer you can't refuse because two of the lessons will be completely free!



The lessons are suitable for complete beginners to advanced swimmers. The instructors are trained to teach swimming, life-saving and all water skills. Are you scared of water? Don't worry! Our trainers are experts in dealing with nervous beginners.

The lessons will run from 1st – 14th August.

English Examples (Reading)

Questions 1–6 are about
Sea Spray Swimming Pool (pages 4–5)

(page 4)

1 Who might be interested in reading this poster?

(page 4)

2 When are the swimming lessons?

(page 4)

3 Give **two** things that the instructors at Sea Spray Pool are trained to teach.

1. _____

2. _____

10 Write one **adverb** to complete the sentence below.

We cut out the shapes _____.

The verbs in boxes are in the present tense.

Write these verbs in the **past tense**.

One has been done for you.

visits



When my family visited the zoo,

take



I _____ photos with my new camera.

smiles



My brother _____ for his picture.

Write **s** or **es** to make each word a plural.

fox _____

card _____

match _____

English Examples (Grammar)

11 Which sentence uses an **exclamation mark** correctly?

Tick **one**.

What a beautiful picture you've drawn!

Do you like art!

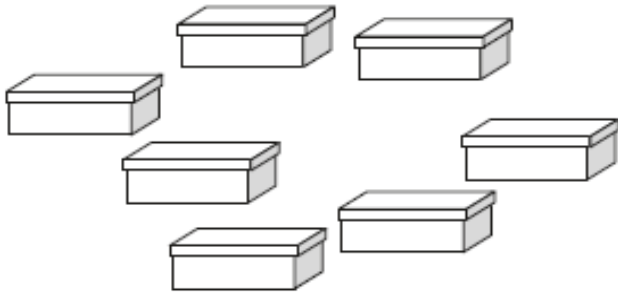
How did you make the colour so bright!

Can you help Samir finish his painting!

Top Tips - ENGLISH

- Read a range of different texts **everyday** including adverts, stories, poems and magazines.
- Encourage your child to express and develop their opinion, giving reasons.
- Encourage your child to think from the author's point of view.
- Why/explain questions will need more detail – children should include the word 'because' when they are explaining their ideas.

7



Sita puts 2 shoes in each of these boxes.

How many shoes are there altogether?

 shoes

8

Complete the table.

| words | digits |
|--------------|--------|
| thirty-eight | 38 |
| | 40 |
| ninety-four | |

Maths Examples (Reasoning)

16

Look at these coins:



What is the largest amount you can make using **three** of these coins?

 p

17

Ben ate half a pizza.



Which fraction shows the amount he ate?

Circle it.

$$\frac{1}{4}$$

$$\frac{1}{3}$$

$$\frac{2}{4}$$

$$\frac{3}{4}$$

23 Write the missing number to make this number sentence correct.

$$9 + 7 - \square = 12$$

24 Tick the shape that has exactly $\frac{1}{3}$ shaded.



Maths Examples (Reasoning)

30 There are **76** cars in the car park.

18 more cars go into the car park.

Then **35** cars go out.



How many cars are in the car park **now**?

Show
your
working

cars

2 marks

Top Tips – MATHS

- Read the question very carefully.

- Underline key words.

e.g. What is the largest amount you can make using three coins?

- Show your working out.

- Check your work!



Any questions?